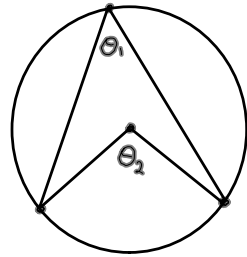
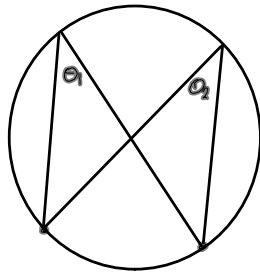


APRIL 19/10

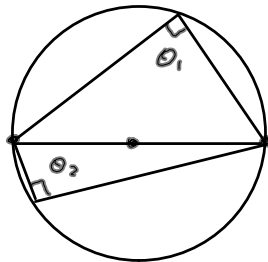
ANGLES AND ARCS



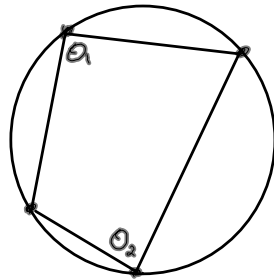
$$2\theta_1 = \theta_2$$
$$\theta_1 = \frac{1}{2}\theta_2$$



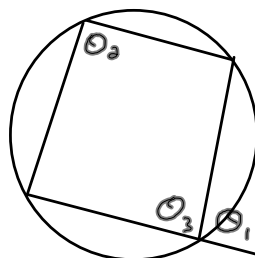
$$\theta_1 = \theta_2$$



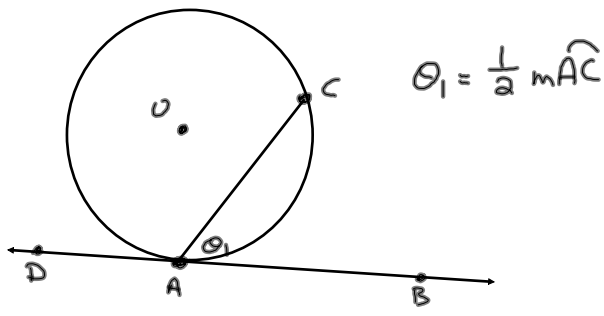
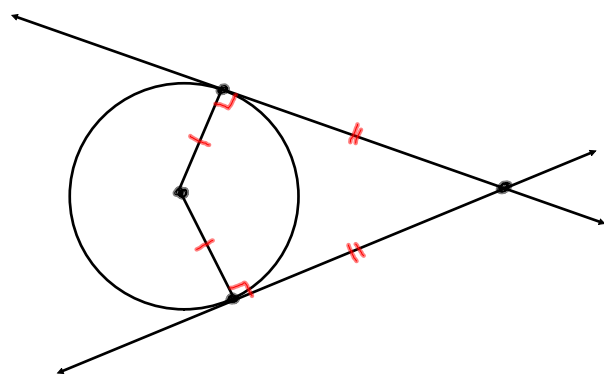
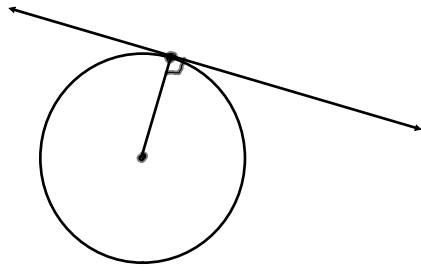
$$\theta_1 = 90^\circ$$
$$\theta_2 = 90^\circ$$



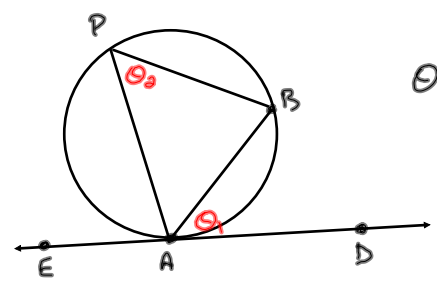
$$\theta_1 + \theta_2 = 180^\circ$$



$$\theta_1 = \theta_2$$
$$\theta_2 + \theta_3 = 180^\circ$$
$$\theta_3 + \theta_1 = 180^\circ$$



$$\theta_1 = \frac{1}{2} m\widehat{AC}$$



$$\theta_1 = \theta_2$$

- Ex #30 Q# 1, 2, 4, 5, 8
- Ex #31 Q# 2, 3, 4, 5
- Ex #32 Q# 1, 3
- Ex #33 Q# 2-6, 12
- Ex #34 Q# 1-3, 5-9
- Ex #35 Q# 1-3, 5